



# Intervals

An interval is the distance between 2 notes.

2<sup>nd</sup> –also called steps

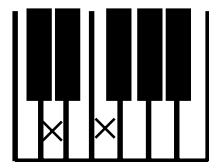
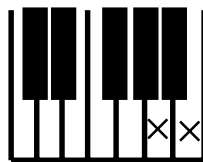
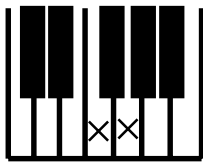
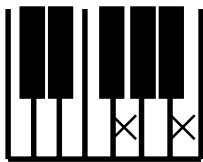
2nds go from a space to a line or line to a space.

3<sup>rd</sup> –also called skips

3rds go from a line to a line or space to a space



What do you think?  
Are these 2nds or 3rds?



\_\_\_\_\_

\_\_\_\_\_

\_\_\_\_\_

\_\_\_\_\_

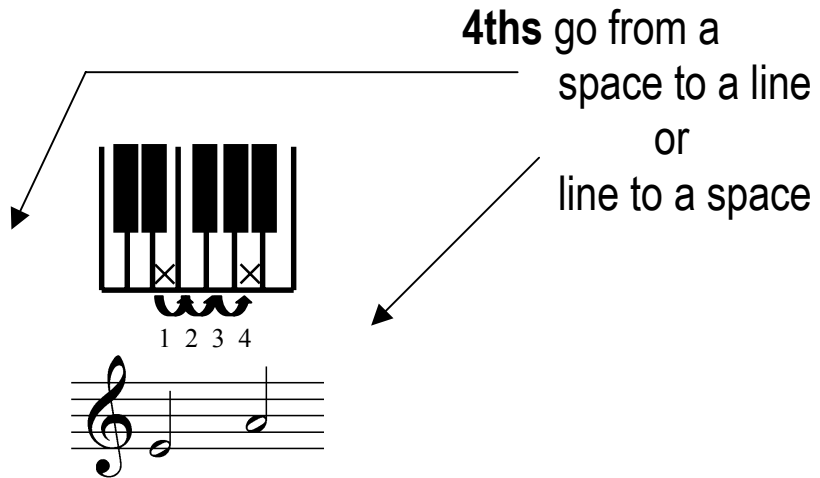
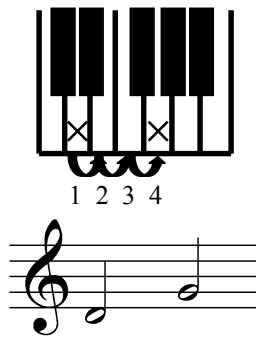
\_\_\_\_\_

\_\_\_\_\_

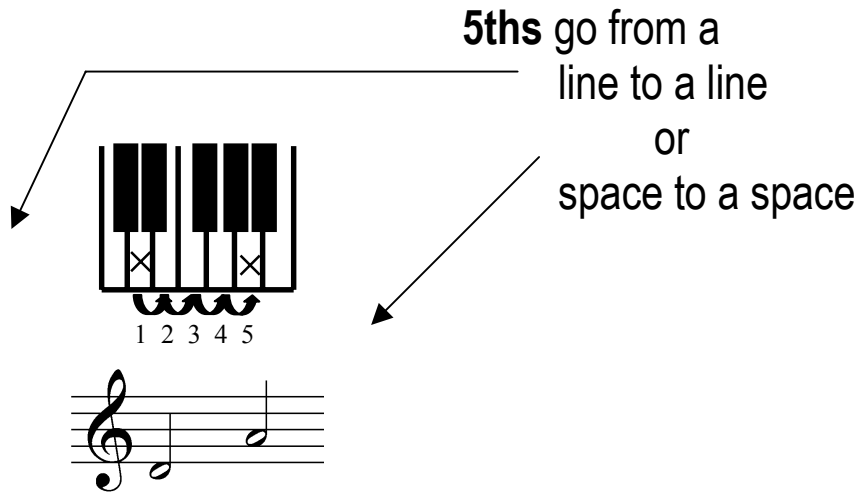

\_\_\_\_\_

\_\_\_\_\_


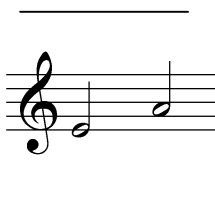
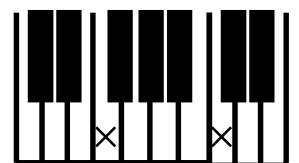
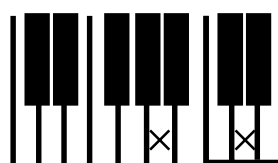
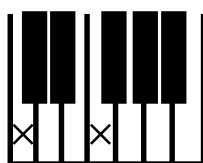
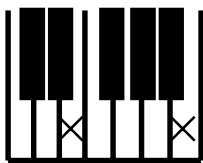
4<sup>th</sup>





5<sup>th</sup>



What do you think?  
Are these 4ths or 5ths?


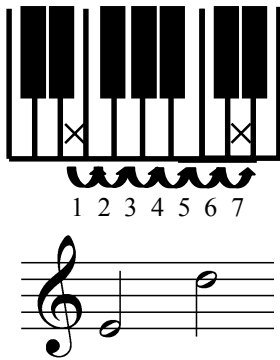


6<sup>th</sup>



6ths go from a  
space to a line  
or  
line to a space

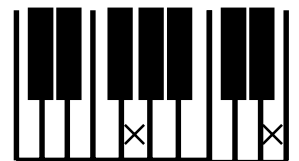
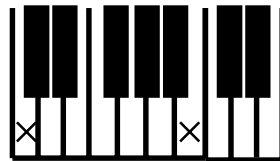
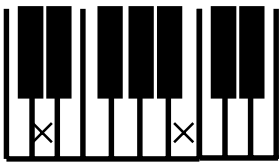
7<sup>th</sup>



7ths go from a  
line to a line  
or  
space to a space



What do you think?  
Are these 6ths or 7ths?






Lets test your BRAIN POWER!

Name these Intervals seen on the staff:

Write 2 3 4 5 6 or 7



Example: 4



Name these Intervals seen on the keyboard:

Write 2 3 4 5 6 or 7

